




# Year 4

# 10 QUICK QUESTIONS A DAY

A Survival Guide for the  
Primary School Curriculum

FOR TEACHERS, RELIEF TEACHERS and PARENTS!



**Example of  
One Week**

CORE YEAR CONTENT

Literacy and Numeracy Curriculum

Complements Ongoing Learning and  
Reinforces Essential Concepts

Repetitive and Constant Revision

Student Workbook

**TWO Curriculums in ONE  
Easy-to-Use Resource!**

**Cindy Holmberg-Smith**

## Acknowledgements and Copyright Laws

Lizard Learning Pty Ltd  
GPO Box 1941, Brisbane, Queensland, 4001  
ABN: 13 158 235 333  
www.lizardlearning.com

Copyright © Lizard Learning 2016  
Edition 2  
First published 2015 by Lizard Learning Pty Ltd



To ensure answers  
are correct for some  
of the numeracy  
questions please print  
the pdf at actual size or 100%  
NOT fit on paper or shrink  
oversized pages.

Publisher: Lizard Learning Pty Ltd  
Content Writers: Cindy Holmberg-Smith, Carmen Kliendienst, Barbara Stewart,  
Cassandra Potts, Elizabeth Beames  
Content Editors: Cindy Holmberg-Smith, Carmen Kliendienst, Barbara Stewart, Steven Fay  
Digital Formatter: New Wave Design, Natalie Pugsley  
Cover Design: Book Cover Cafe, New Wave Design  
Illustrators: Trevor Salter, Book Cover Cafe, Aleisha Coffey, New Wave Design  
Project Managers: Cindy Holmberg-Smith, Anthony Puttee  
Administration Officers / Desktop Operators: Natalie Pugsley, Dylan Holmberg

### *Reproduction and communication for educational purposes*

The Australian Copyright Act 1968 (the Act) allows for maximum of one chapter or 10% of the pages of work, whichever is the greater, to be reproduced and/or communicated by any educational institution for its educational purposes provided that the educational institution (or the body that administers it) has given remuneration notice to Copyright Agency Limited (CAL) under the Act. For details of the CAL licence for educational institutions contact Copyright Agency Limited ([www.copyright.com.au](http://www.copyright.com.au)).

### *Reproduction and communication for other purposes*

Except as permitted under the Act (for example a fair dealing for the purposes of study, research, criticism, or review), no part of this book may be reproduced, stored in a retrieval system, communicated or transmitted in any form or by any means without prior written permission. All enquiries should be made to the publisher at the address above.

### *Classroom Use*

This book is an individual Student Workbook. For teachers to use this resource in the classroom, a school licence is required. Please contact [sales@lizardlearning.com](mailto:sales@lizardlearning.com) for more details on reduced school licence pricing.

***This book is not to be treated as a blackline master.***

All rights reserved.

ISBN: 978-1-925509-14-4

1. Rewrite the sentence/s with the correct **punctuation** and **spelling**:  
get out of my room jake kym screamed to her bruther every time he tryed entering her room

\_\_\_\_\_

\_\_\_\_\_

2. **A preposition is a word used before a noun or a pronoun to show its relationship to some other word in the sentence; it is used to make a phrase (e.g under the box, in the box, on the box, by, up, down, near, through, over, at).** Write the **preposition/s** you find in this phrase: inside the barn \_\_\_\_\_

3. **Plurals are words that mean more than one.**  
Write four singular words and have someone write their matching **plural**: \_\_\_\_\_

\_\_\_\_\_

\_\_\_\_\_

4. **Can you remember the meaning of antonyms to complete this question?** Write the definition of an **antonyms**: \_\_\_\_\_

\_\_\_\_\_

\_\_\_\_\_

g	f	n	z	g
e	l	z	y	e
x	a	p	a	a
l	d	e	d	r
s	e	t	h	s
r	p	r	t	t
i	a	o	r	i
t	q	l	i	c
k	w	x	b	k

5. There are **three** words relating to **motoring**. There is one **odd** word which relates to a **celebration** once a year. Find all **four** words and write them on the lines below:

\_\_\_\_\_

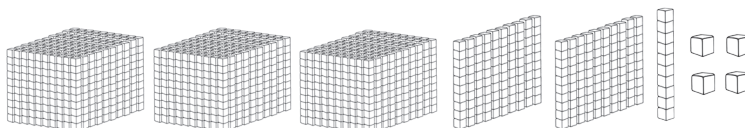
\_\_\_\_\_

\_\_\_\_\_







6. What time does the teacher's clock show right now? \_\_\_\_\_  
What will be the time **30 minutes** from now? \_\_\_\_\_

Write the missing time: \_\_\_\_\_ 9:20 9:50 10:20

7. What number are the **MAB blocks** showing? \_\_\_\_\_



8. Write the mode of transport you see at position bottom row, left column: \_\_\_\_\_

top row		
middle row		
bottom row		
	left column	right column

9. What **day** and **date** comes before 1 March this year? \_\_\_\_\_  
What **day** and **date** comes after 31 March? \_\_\_\_\_

10. Write an addition number story for the numbers 699 and 123: \_\_\_\_\_



- Rewrite the sentence/s with the correct **punctuation** and **spelling**:  
 maries father was a fireman at the local fire stachion \_\_\_\_\_  
 \_\_\_\_\_
- A sentence or a clause, is a group of related words containing a subject and a verb.**  
 Write one **clause** of your own: \_\_\_\_\_  
 \_\_\_\_\_
- Compound words are two or more words joined together to form a new word (e.g. seashell).** Add a word to make a **compound** word:  
 board \_\_\_\_\_ some \_\_\_\_\_ friend \_\_\_\_\_
- Synonyms are words that have similar meanings.**  
 Write four words and ask someone to write **synonyms** for your words:  
 \_\_\_\_\_  
 \_\_\_\_\_
- Write the **consonants** in the alphabet: \_\_\_\_\_  
 \_\_\_\_\_
- What time does the teacher's clock show right now? \_\_\_\_\_  
 What was the time **35 minutes** ago? \_\_\_\_\_  
**73 months + 59 months =** \_\_\_\_\_ Write the answer in **years** and **months**: \_\_\_\_\_
- Calculator Sentences - change 420 to 20 using your calculator (e.g. 420 - 400 = 20).**  
 Write the **calculator sentence** you would need to change **396** to **96**: \_\_\_\_\_
- What state is **north** of **Victoria**? \_\_\_\_\_
- What **day/s** is Love You Forever being read? \_\_\_\_\_  
 How **many** times is The Lion and the Mouse being read this week? \_\_\_\_\_

Reading Groups At The Local Library							
	9:15	9:45	10:30	10:45	11:05	11:35	Noon
Monday	Love you forever	Where the Wild Things Are	The Lorax	Guess How Much I Love You?	The Giving Tree	Harold and the Purple Crayon	Everyone Laughs
Wednesday	Everyone Laughs	Peek a Who	Green Eggs and Ham	The Very Hungry Caterpillar	Green Eggs and Ham	The Going to Bed Book	The Lorax
Thursday	The Lion and the Mouse	Press Here	Pat the Bunny	Goodnight Moon	The Lion and the Mouse	Press Here	The Lorax
Saturday	No David	No David	Pinkalicious	Moo Ba La La La	No David	Love you forever	Flotsam

- Edmund bought a shirt for \$42 and a pair of pants for \$24.  
 How much did he spend altogether? \_\_\_\_\_



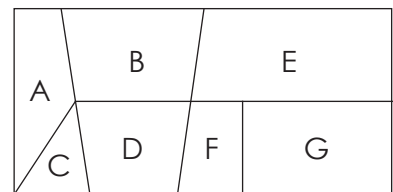
- Rewrite the sentence/s with the correct **punctuation** and **spelling**:  
the cows horses and chickens were locked away in there paddock and chicken coop at nite  
\_\_\_\_\_
- Contractions are shortened forms of two words.** Does this sentence use the **contraction** correctly? If not, rewrite the sentence correctly: They're books are in the bookcase.  
\_\_\_\_\_
- Plurals are words that mean more than one.** Write the **plurals** for:  
woman \_\_\_\_\_ teacher \_\_\_\_\_ uncle \_\_\_\_\_
- There are three articles: the, a and an. The, is a definite article (e.g. give me the cup). A, is an indefinite article (e.g. give me a cup. This would be any cup). An, is the article to use before a vowel (e.g. an umbrella).** Write the **article/s** in this sentence:  
The birds soared over the tree tops and down near a bird bath, beside an apple tree.  
\_\_\_\_\_
- Write a word and then write the word in **future tense**: \_\_\_\_\_
- What time does the teacher's clock show right now? \_\_\_\_\_  
What will be the time **40 minutes** from now? \_\_\_\_\_  
**Eleven months - 2 months =** \_\_\_\_\_

7. Write the **fraction** you see shaded: \_\_\_\_\_



8. Complete the pattern:  $\frac{40}{100}$     $\frac{41}{100}$     $\frac{42}{100}$    \_\_\_\_\_

9. How many **parallel lines** do you see? \_\_\_\_\_  
How many **right angles** do you see? \_\_\_\_\_



10. Complete this magic square so each row, column and diagonal adds to 72.

		26
		28
	32	18



- Rewrite the sentence/s with the correct **punctuation** and **spelling**:  
when you arrive at a hotel the concierge take your bags from your car to your room  
\_\_\_\_\_
- Find and write the misspelled words in this sentence:  
The farmer rounded up his cows for milking. \_\_\_\_\_
- Contractions are shortened forms of two words.**  
Write the long version of the **contractions** in this sentence: Let's go and play a fun game together and we'll have an ice-cream afterwards. \_\_\_\_\_
- Write the **nearest meaning** to **sphere**: \_\_\_\_\_  
a) a round solid figure      b) a star does this in the night sky
- Rearrange these words to make a proper sentence:  
bedroom goodnight was in my I a came book dad in when reading me and said to. \_\_\_\_\_
- What time does the teacher's clock show right now? \_\_\_\_\_  
What will be the time **45 minutes** from now? \_\_\_\_\_  
Write the missing **12 hour times**: 10:55 \_\_\_\_\_ 11:05 11:10 \_\_\_\_\_ 11:20
- I bought 12 chocolate bars for my birthday party.  
I handed over \$30. How much change will I receive?  
\_\_\_\_\_

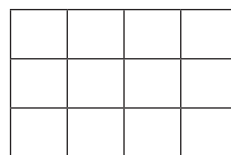


- Write the **number** for the tally marks shown in this table:

Sandwich Fillings		
Sandwich		
Fruit		
Chips		



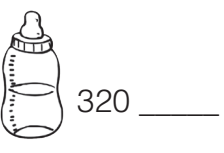

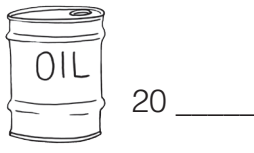
- Area measures the size of a surface. Square centimetres is the measure used for small surfaces (e.g. the desk top). Square metres is used for larger surfaces (e.g. a football field). Formula for Area = Length x Width.  $1\text{cm}^2 = 1\text{cm} \times 1\text{cm}$ .  $A = L \times W$ .**

Find the **area** of this shape:  
\_\_\_\_\_  $\text{cm}^2$



- Sixteen giraffes had arrived at the zoo.  
The keepers had four pens for them to live in.  
How many giraffes in each pen? \_\_\_\_\_



- Rewrite the sentence/s with the correct **punctuation** and **spelling**:  
 they realy didnt now what to do the storm was raging owtside but all the anemals where still outside and where geting more disttressed \_\_\_\_\_  
 \_\_\_\_\_
- Can you remember the meaning of pronouns to complete this question?**  
 Write the definition of **pronouns**: \_\_\_\_\_  
 \_\_\_\_\_
- Rearrange this word. It relates to a **diamond ring**. Is the word a **Noun, verb** or **adjective**?  
 glkisinpar \_\_\_\_\_ **noun, verb** or **adjective**? \_\_\_\_\_
- Can you remember the meaning of homographs and homophones to complete this question?**  
 Write two separate sentences to explain these **homophones**:  
 allowed: \_\_\_\_\_  
 aloud: \_\_\_\_\_
- Writing Time!** Finish this sentence. We could not move the car as we... \_\_\_\_\_  
 \_\_\_\_\_  
 \_\_\_\_\_
- What time does the teacher's clock show right now? \_\_\_\_\_  
 What will be the time **50 minutes** from now? \_\_\_\_\_  
**51 months** + \_\_\_\_\_ months = **ninety-nine** months  
 Write the answer above in **years** and **months**: \_\_\_\_\_ years \_\_\_\_\_ months
- My answer is 12. I doubled the number and added 4. What number did I start with? \_\_\_\_\_  
 Show your workings: \_\_\_\_\_
- 
- Place **L** or **mL** to match the label:  




- Darcy had to lay telephone cable underground. 725 metres had to be placed in the ground first, but he only finished 616 metres before a storm came and he couldn't continue. How many more metres of cable are there left to be laid? \_\_\_\_\_

